

School Name _____

Name _____

Class _____

Geometry

1. The radii of circles are given. Find the corresponding diameter for each of the following.

a) 15 cm _____ b) 25 cm _____

c) 10 cm _____ d) 16 cm _____

e) 12 cm _____ f) 5 cm _____

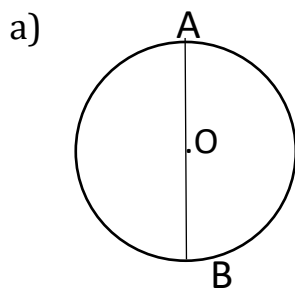
2. The diameter of circles are given. Find the corresponding radii for each of the following.

a) 40 cm _____ b) 46 cm _____

c) 26 cm _____ d) 32 cm _____

e) 12 cm _____ f) 24 cm _____

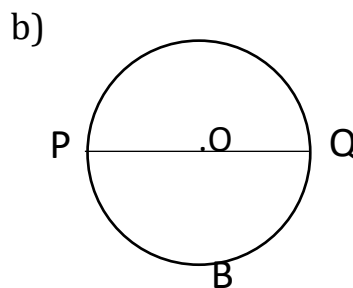
3. For each of the following figures name the diameter and two radii.



Diameter _____

Radius _____

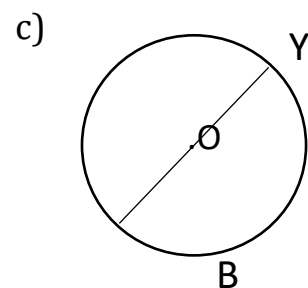
Radius _____



Diameter _____

Radius _____

Radius _____



Diameter _____

Radius _____

Radius _____