

School Name _____

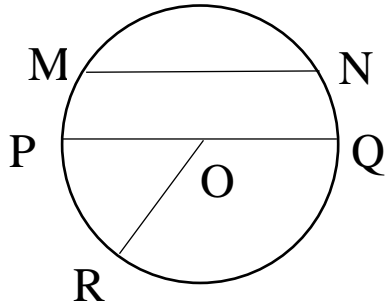
Name _____

Class _____

Geometry

1. In the figures given below name the following :

a)



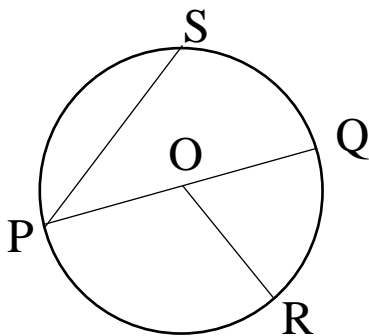
The centre _____

A radius _____

A chord _____

A diameter _____

b)



The centre _____


A radius _____

A chord _____

A diameter _____

2. In the figures given below draw the following:

- a) A radius AB
A chord PQ
A diameter MN



- b) A radius AB
A chord XY
A diameter PQ

