


Jugs and Mugs Set-1



Name _____ Date _____

Class _____ Roll No _____

School Name _____

Fill in the blanks.



- _____ cup  water will fill your water bottle.
- Which container take less water to fill fully bucket or water bottle

- _____ cup  water will fill your mug.
- _____ cup  water will fill your jug.
- Which can hold more water,







- How many glass  of water you drink in a day? _____
- How many glass  of water your mom drink in a day? _____
- How many mugs of water fill one bucket? _____
- How many buckets of water do you use to take a bath?
